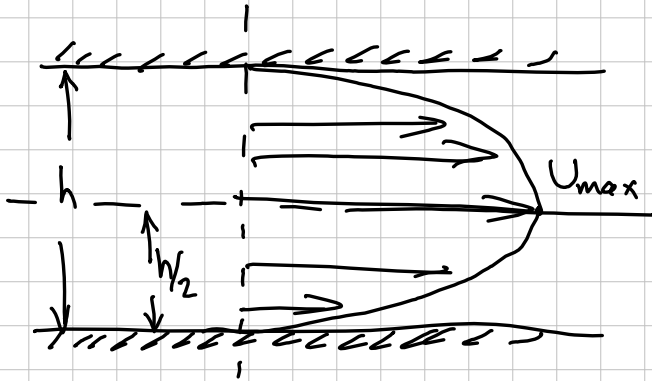


PI. FLOW BETWEEN PARALLEL PLATES VELOCITY PROFILE:

$$u(y) = \frac{4U_{\max}}{h^2} (hy - y^2)$$



KNOWN

GEOMETRY
 $u(y)$

UNKNOWN

\bar{u} (mean section velocity)

Q for depth w

GOVERNING PRINCIPLES

$$\bar{u} = \frac{\int_0^h u(y) dy}{\int_0^h dy}$$

$$Q = \bar{u} A$$

SOLUTION

3/2

$$\bar{U} = \int_0^h \frac{4U_{\max}}{h^2} (hy - y^2) dy$$

$$\int_0^h dy$$

$$= \frac{4U_{\max}}{h^2} \left[\frac{hy^2}{2} - \frac{y^3}{3} \right]_0^h$$

$$= \frac{4U_{\max}}{h^2} \left[\frac{h^3}{2} - \frac{h^3}{3} \right] = 4U_{\max} \left[\frac{1}{2} - \frac{1}{3} \right]$$

$$= 4U_{\max} \left[\frac{3}{6} - \frac{2}{6} \right] = 4U_{\max} \left[\frac{1}{6} \right]$$

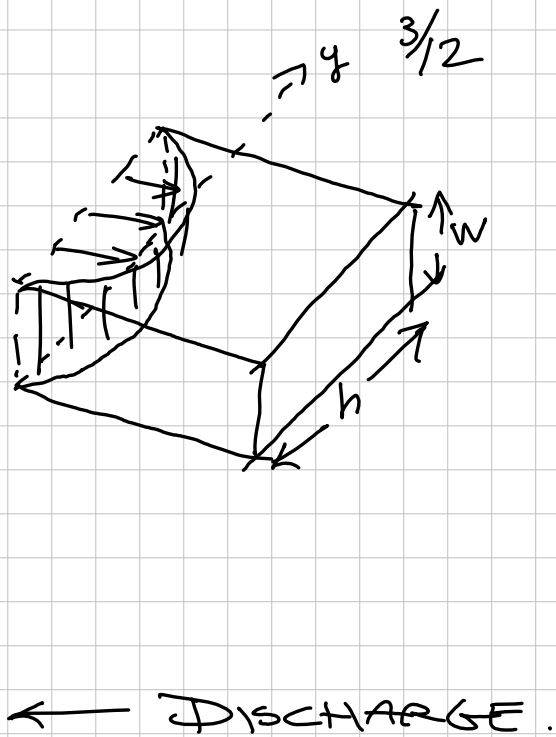
$$= \frac{2.7}{3.7} U_{\max} = \underline{\underline{\frac{2}{3} U_{\max}}} \leftarrow \text{MEAN SECTION VELOCITY}$$

$$Q = \bar{U} A$$

$$\bar{U} = \frac{2}{3} U_{\max}$$

$$A = hw$$

$$Q = \frac{2}{3} U_{\max} h w$$

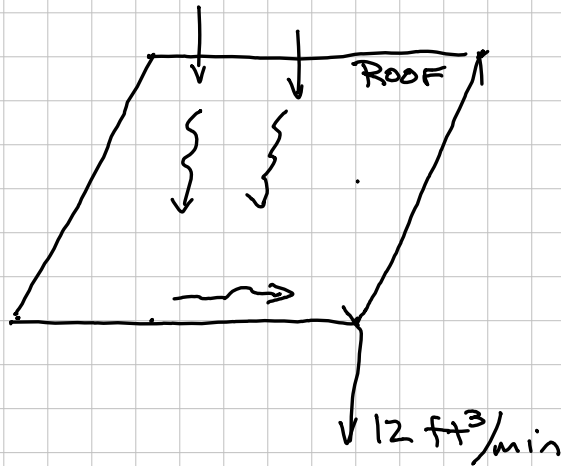
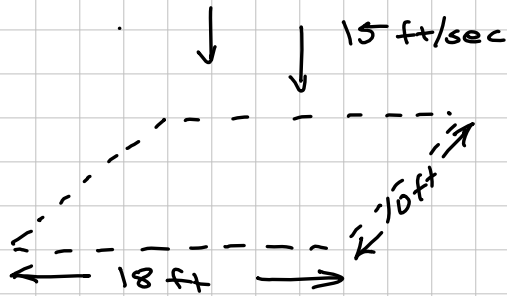


DISCUSSION

APPLICATION OF DEFN. MEAN
SECTION VELOCITY
(EQ. 4-3) IN DA BOOK!

PROBLEM 2

4/12



RAIN FALLS VERTICALLY ONTO ROOF WITH SPEED 15 ft/s. ROOF CATCH & ACCUMULATES $12 \text{ ft}^3/\text{min}$

FIND

- 1) AMOUNT RAINWATER IN $1 \text{ ft}^3/\text{AIR}$
- 2) DROPS PER ft^3/air

KNOWN

DIMENSIONS ROOF, v_{fall}

v_{drop}

UNKNOWN

5/12

$$Q_{\text{RAIN}} / \text{ft}^3 \quad \text{AIR}$$

$$\# \text{ DROPS} / \text{ft}^3 \quad \text{AIR}$$

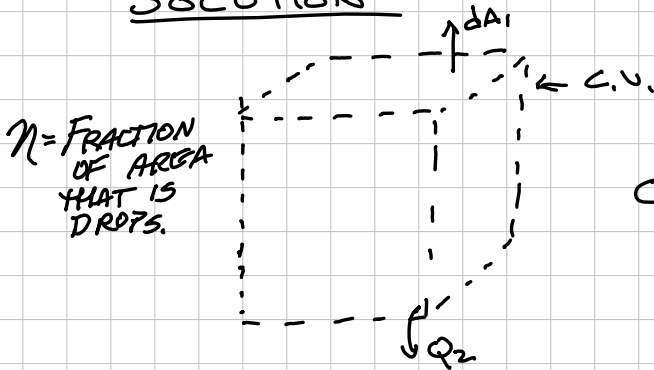
GOVERNING EQN

CONTINUITY

$$Q = VA$$

$$V_{\text{drop}} = \frac{4}{3} \pi r^3 = \frac{\pi d^3}{6}$$

SOLUTION



CONTINUITY

$$0 = \frac{d}{dt} \int_{\text{C.V.}} \rho dV + \int_{\text{C.S.}} \rho \mathbf{v} \cdot d\mathbf{A}$$

$$n \cdot (15 \text{ ft} / 5) (10 \text{ ft}) (18 \text{ ft}) - \cancel{12 \text{ ft}^3 / \text{min}} = 0$$

$$n (15 \text{ ft} / 5) (10 \text{ ft}) (18 \text{ ft}) \left(\frac{60 \text{ s}}{\text{min}} \right) = 12 \text{ ft}^3 / \text{min}$$

SOLVE FOR n

$$n = 0.000741 \leftarrow \text{FRACTION OF AREA THAT IS WATER}$$

∴ V_{WATER} per $1 \text{ ft}^3/\text{air}$ is $\frac{6}{12}$
 $0.0000741 \text{ ft}^3 \text{ water} / \text{ft}^3 \text{ air} \leftarrow$
(SO MOSTLY AIR)

DROPS

$$V_{\text{drop}} = \frac{\pi d^3}{6} = \pi \left(\frac{0.18}{12} \right)^3$$
$$= 0.0000018 \text{ ft}^3/\text{drop}$$

∴

$$\frac{0.0000741 \text{ ft}^3}{0.0000018 \text{ ft}^3/\text{drop}} = 41 \text{ drops}/\text{ft}^3$$

DISCUSSION

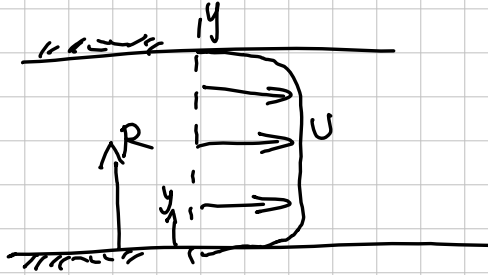
- REALLY JUST APPLICATION OF CONTINUITY. THE RELATIVELY SMALL NUMBERS COMPLICATES THINGS A LITTLE
- FIND V/ft^3 ; then how many drops make up volume

PROBLEM 3

7/12

CIRCULAR PIPE

$$u(y) = U \left(\frac{y}{R} \right)^{1/7}$$



FIND \bar{u} , Q

KNOWN

$u(y)$, GEOMETRY

UNKNOWN

\bar{u} , Q

GOVERNING PRINCIPLES

$$\bar{u} = \frac{\int u \cdot dA}{\int dA}, \quad Q = \bar{u} A$$

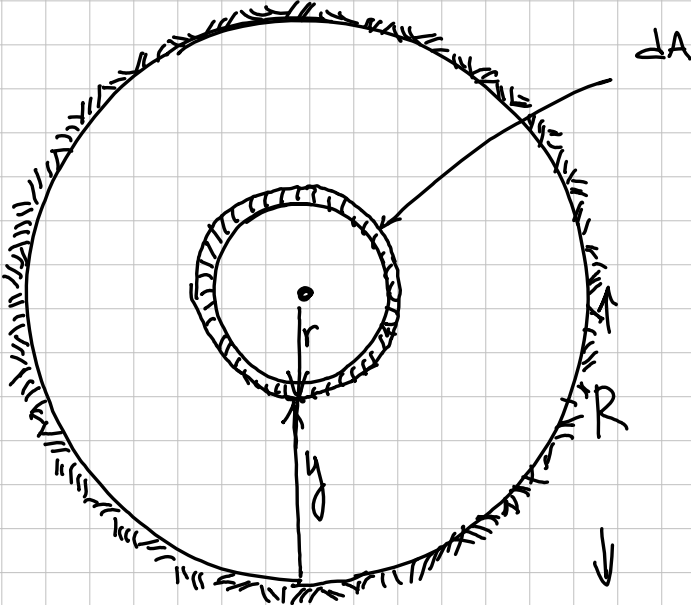
SOLUTION

8/12

RECOGNIZE CIRCULAR CROSS-SECTION.

KEEP $U(y)$ FORM, BUT EXPRESS

dA IN TERMS OF R AND y .



$$r = R - y; \quad dA = 2\pi(R - y) dy$$

$$\bar{U} = \frac{\int_0^R 2\pi(R - y) U\left(\frac{y}{R}\right)^{1/7} dy}{\int_0^R 2\pi(R - y) dy}$$

$$\bar{U} = \frac{\int_0^R 2\pi (R-y) U \left(\frac{y}{R}\right)^{1/7} dy}{\int_0^R 2\pi (R-y) dy}$$

9/12

$$= \frac{2\pi U \int_0^R \frac{R y^{1/7}}{R^{1/7}} - \frac{y^{8/7}}{R^{1/7}} dy}{\int_0^R 2\pi (R-y) dy}$$

$$= \frac{2\pi U}{R^{1/7}} \left[\frac{R y^{8/7}}{8/7} - \frac{y^{15/7}}{15/7} \right]_0^R$$

$$2\pi R y - \frac{y^2}{2} \Big|_0^R$$

$$= \frac{2\pi U}{R^{1/7}} \left(\frac{R \cdot R^{8/7}}{8/7} - \frac{R^{15/7}}{15/7} \right)$$

$$\frac{2\pi R^2 - \frac{2\pi R^2}{2}}{2}$$

$$= \frac{2\pi U \left(\frac{R \cdot R^{8/7}}{8/7} - \frac{R^{15/7}}{15/7} \right)}{2\pi R^2 - \pi R^2}$$

$$2\pi R^2 - \pi R^2$$

$$= 2\cancel{\pi} U \left(\frac{R \cdot R^{7/7}}{8/7} - \frac{R^{14/7}}{15/7} \right) \quad 10/12$$

$$\frac{2\cancel{\pi} R^2 - \cancel{\pi} R^2}{}$$

$$= 2U \left(\frac{R^2}{8/7} - \frac{R^2}{15/7} \right)$$

$$R^2$$

$$= 2U \cancel{R^2} \left(\frac{7}{8} - \frac{7}{15} \right)$$

$$\cancel{R^2}$$

$$= 2U \left(\frac{7(15) - 8(7)}{(8)(15)} \right)$$

$$= \cancel{2}U \left(\frac{49}{\cancel{12}0}_{60} \right) = \underline{\underline{\frac{49}{60} U}} \leftarrow$$

TA DA!

VOLUMETRIC FLOW RATE

DEFN: $\bar{U} \cdot A$

$$\bar{U} \cdot A$$

$$A = \pi R^2$$

$$1^{1/2}$$

$$\therefore \underline{\underline{Q = \frac{49}{60} U \pi R^2}}$$

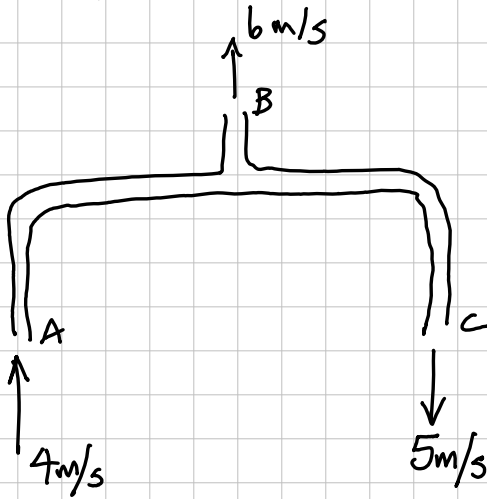


DISCUSSION

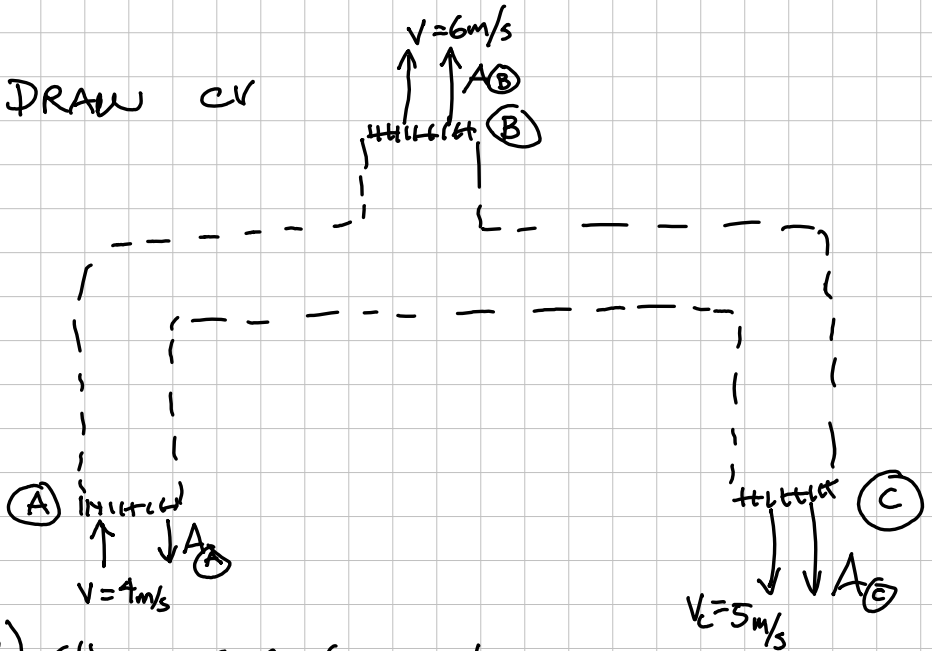
- DIRECT APPLICATION OF DEFN. \bar{U} .
- COMPLEXITY IN THAT WANT TO PERFORM INTEGRATION ACROSS PIPE IN x y COORDINATES BECAUSE THE $1/2$ POWER OTHERWISE COMPLICATES INTEGRAL

PIPE SYSTEM

12/12



1) DRAW CV



2) SHOW C.S. (INLETS/OUTLETS)

3) SHOW VELOCITIES & AREA VECTORS